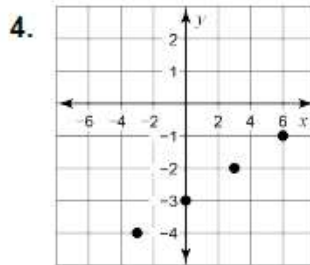
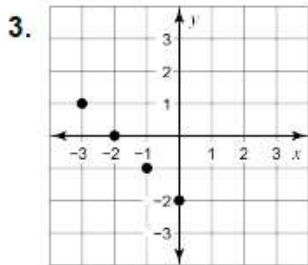
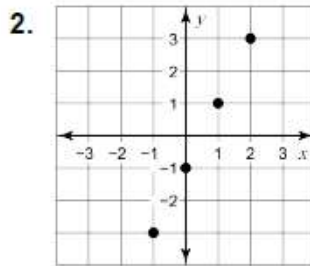
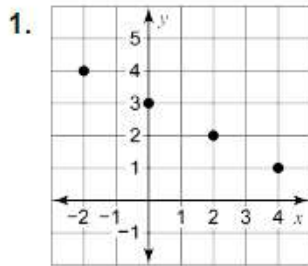


What Would You Get If You Crossed A Vampire With A Snowman?

Write the letter of each answer in the box containing the exercise number.

Use the graph or table to write a linear function that relates y to x .



5.

x	-2	0	2	4
y	4	5	6	7

6.

x	-4	-2	0	2
y	0	-2	-4	-6

7.

x	-2	0	2	4
y	-8	-5	-2	1

8.

x	0	2	4	6
y	2	0	-2	-4

Answers

S. $y = 2x - 1$

R. $y = \frac{1}{2}x + 5$

E. $y = -\frac{1}{2}x + 3$

O. $y = \frac{1}{3}x - 3$

T. $y = \frac{3}{2}x - 5$

I. $y = -x - 2$

B. $y = 6x$

F. $y = -x + 2$

T. $y = -x - 4$

9. The table shows the number x of cups of pancake mix needed to make y pancakes. Write a linear function that relates y to x .

Cups of Mix, x	1	2	3	4
Pancakes, y	6	12	18	24

8	5	4	2	7	9	3	6	1
---	---	---	---	---	---	---	---	---